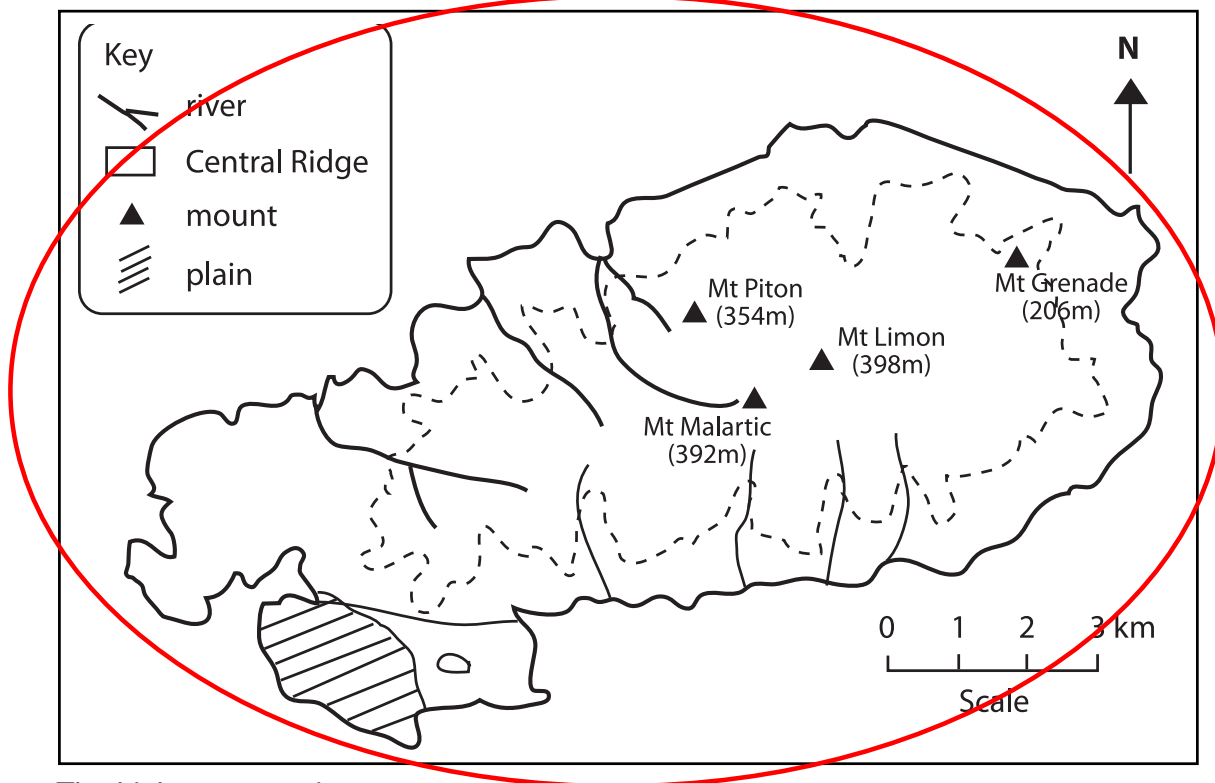



Test Paper -Grade 4- Erratum

B. Study Map 2 carefully, For items 8, 9 and 10 ring the letter which shows the correct answer

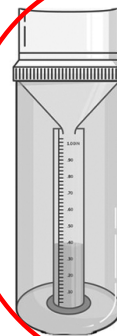


8. The highest mount is
- A Mont Piton B Mont Malartic C Mont Limon D Mont Grenade
9. Shaded area  in the South West of Rodrigues is
- A Plaine Corail B Port Mathurin C a river valley D a chain of mounts
10. The rivers in Rodrigues take their source on
- A the coast B the highlands C the lowlands D the beach [6]

Question 2: Ring the letter A, B or C to show the correct answer

1. The instrument used to measure the amount of rainfall in **picture 1** is


- A a thermometer.
B a rain gauge.
C an anemometer.



Picture 1

2. **Picture 2** shows a place of worship. It is a

- A mosque
B church
C pagoda.



Picture 2

[4]

3. Which spice is shown in **Picture 3** ?

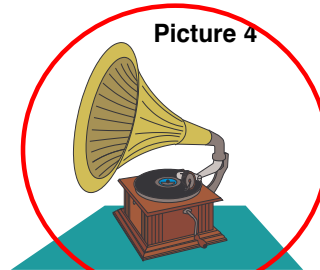
- A Cloves.
- B Cardamon
- C Cinnamon.



Picture 3

4. **Picture 4** shows an instrument used to listen to music and songs long ago. It is a

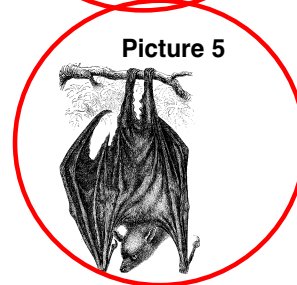
- A Hifi sound system.
- B radio
- C gramophone.



Picture 4

5. The animal shown in **Picture 5** still exists in Mauritius. It is a

- A bat.
- B solitaire
- C dodo.



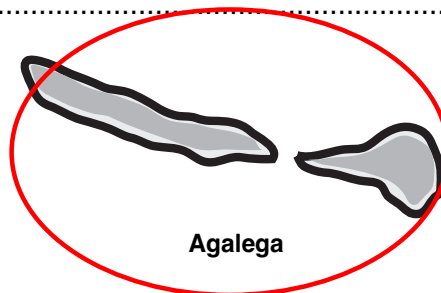
Picture 5

[6]

Question 3: Fill in the blanks with the correct word or words.

1. Most of the land in Agalega is used for

- A sugar cane cultivation
- B coconut plantation
- C vegetable cultivation



Agalega

2. Le Pouce Mountain is found in the

- A Grand Port Range
- B Black River Range
- C Moka Range

3. The sun always rises in the every morning.

- A north
- B west
- C east

4. A building or statue to remember an important event or person is called a

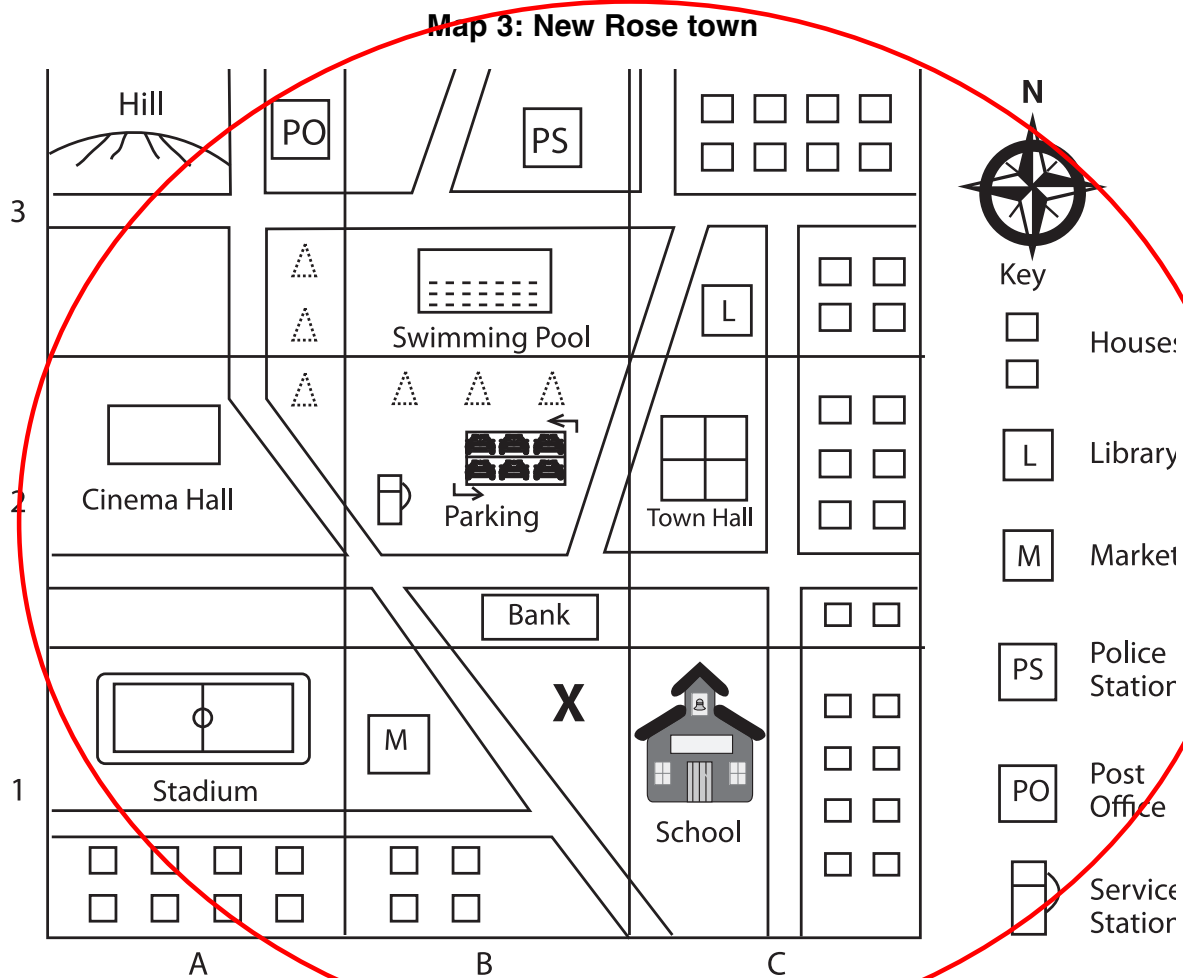
- A monument
- B museum
- C hospital

5. A big continent found to the west of Mauritius is

- A Australia
- B Africa
- C Europe

[10]

Question 6: Study Map 3 carefully.



Now answer the following questions.

1. What is the **title** of the map ?
2. The Town Hall is found in Square
3. In which direction is the hill from the bank ?
4. Name the public building from which people in the town borrow books for reading.
.....
5. Name **two** leisure activities people in New Rose town can do.
(a)
(b)
6. (i) Name one useful feature **not** found in Map 3 which could be built at Place X.
.....
(ii) Give one reason for your answer to Part 6 (i).
.....
.....

Question 7: Study Map 3 carefully

The Mascarene Islands are sometimes affected by cyclones.

1. Tick (✓) the box which shows the correct answer.

Regular weather reports and cyclone warnings are prepared and sent by the

Police Station.

Meteorological Station.

Fire Station.



2. Name the **season** during which cyclones affect the Mascarene Islands.

.....

3. Why are cyclone warnings important to people ?

.....

4. Write **one** sentence to say how cyclones can affect us.

.....

.....

[8]

Question 8

About 500 years ago, sailors from countries in Europe travelled in the Indian Ocean.

Fill in the blanks with the correct word or words chosen from the list below.

trade spices Portuguese sailing ships islands Dutch

1. The first Europeans who travelled in the Indian Ocean were the
2. The sailors travelled in big
3. The Europeans travelled at sea to with countries bordering the Indian Ocean.
4. They discovered many in the Indian Ocean.
5. They were interested to buy in East Indies.

[10]