

Table Of Contents

Pages

Mathematics

Test 1	1 - 9
Test 2	10 - 17
Test 3	18 - 26
Test 4	27 - 33
Test 5	34 - 41
Test 6	42 - 48

English

Test 1	49 - 54
Test 2	55 - 60
Test 3	61 - 67
Test 4	68 - 73
Test 5	74 - 79
Test 6	80 - 85

French

Test 1	86 - 92
Test 2	93 - 98
Test 3	99 - 104
Test 4	105 - 110
Test 5	111 - 116
Test 6	117 - 122

Health Education

Test 1	123 - 127
Test 2	128 - 132
Test 3	133 - 137
Test 4	138 - 142
Test 5	143 - 147
Test 6	148 - 152


WELCOME!

Mathematics - Test 1

Total:100 marks

Question 1 (10 marks)

(a) Tick (✓) the **short** pencil.



(1 mark)

(b) Cross (x) the **shorter** candle.



(1 mark)

(c) Cross (x) the **taller** tree.



(1 mark)

(d) Circle the girl having **shorter** hair.



(1 mark)

(e) Tick (✓) the **shorter** toothpaste?




(1 mark)

(f) Circle the **taller** animal?



(1 mark)

(g) Tick (✓) the **longer** one.



(1 mark)

(h) Circle the **lighter** one.



(1 mark)

(i) One of these animals is lighter. Colour the box showing the **lighter** one orange.



(1 mark)


(j) Cross (X) the **heavier** one.



(1 mark)

Question 2 (7 marks)

(a) Colour the **big** shapes green and the **small** shapes orange.



(b) Draw a **big green** rectangle and a **small blue** rectangle.


(2 marks)

(c) Tick (✓) the **small blue** rectangles.




(1 mark)

(d) Cross (X) the **small green** triangles.



(1 mark)


(e) Circle the red objects.



(2 marks)

(f) Complete the Carol diagram

small		
small		



(4 marks)

Question 3 A (3 marks)

I match the ordinal number to its name.

3rd ●

● third

5th ●

● seventh

12th ●

● sixth

6th ●

● fifth

7th ●

● twelfth

(5 marks)

Question 3 B (5 marks)

I write the correct name.

2nd : _____

1st : _____

4th : _____

11th : _____

10th : _____

fourth

eleventh

second

tenth

first

(5 marks)

Question 4 A. (10 marks)

Match the numerals to their number names.

58 •

72 •

4 •

15 •

99 •

5 •

34 •

44 •

100 •

67 •

• five

• thirty four

• fifty eight

• forty four

• sixty seven

• one hundred

• fifteen

• seventy two

• four

• ninety nine

(10 marks)

Question 4 B (10 marks)

Write the correct numeral.

- (a) Ninety one : _____
- (b) Thirty : _____
- (c) Fifty five : _____
- (d) Seventy three : _____
- (e) Fourteen : _____
- (f) Forty : _____
- (g) Eighty two : _____
- (h) Sixty seven : _____
- (i) Three : _____
- (j) Twenty four : _____

(10 marks)

Question 5 (10 marks)

- (a) Tick (✓) the container having the smaller capacity.




(1 mark)

- (b) Cross (X) the container having the greater capacity.



(1 mark)

(c) Draw a mug having a **greater** capacity.



(1 mark)

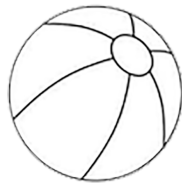
(d) Cross (X) the containers which are **empty**.

Tick (✓) the containers which are **full**.



(4 marks)

(e) Colour the **bigger** ball **green**.



(1 mark)

(f) Circle the **smaller** bag.



(1 mark)

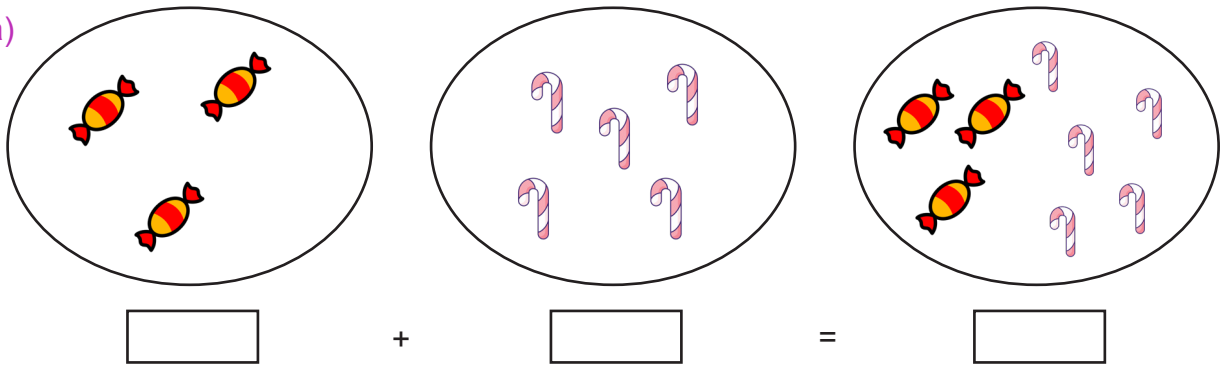
(g) Draw a **smaller** balloon.



(1 mark)


Question 6 (20 marks) – Workout the following.

(a)




(4 marks)

(b)



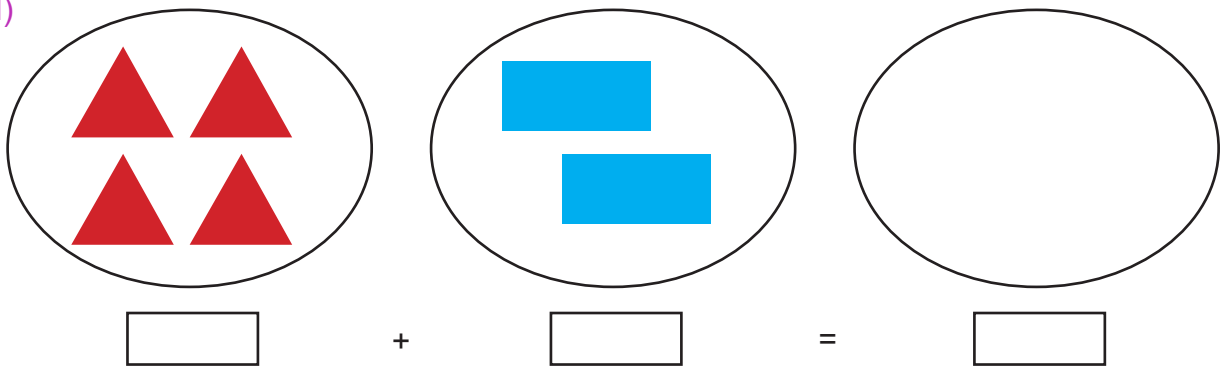
(4 marks)

(c)



(4 marks)

(d)



(4 marks)